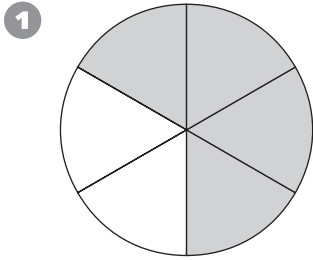


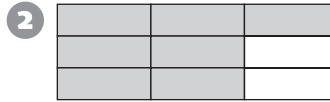
Number and Operations

Write fractions to name the shaded and unshaded parts.



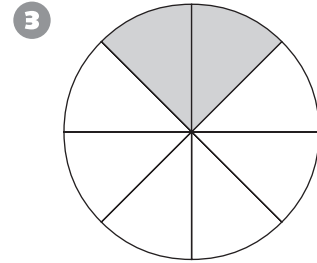
Shaded: _____

Unshaded: _____



Shaded: _____

Unshaded: _____




Shaded: _____


Unshaded: _____

Measurement

Circle the more reasonable weight.



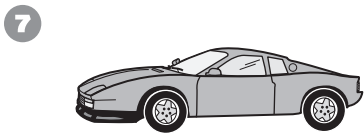
12 oz 1,200 lb




9 oz 9 lb



80 oz 80 lb



200 oz 2,000 lb



18 oz 18 lb



3 oz 3 lb

Problem Solving

Choose a number that makes sense. Solve the problem.

- 10 Thomas walks _____ to school each day. He walks the same number of blocks home. How many blocks does he walk in 5 days?
