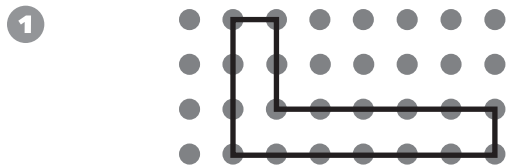
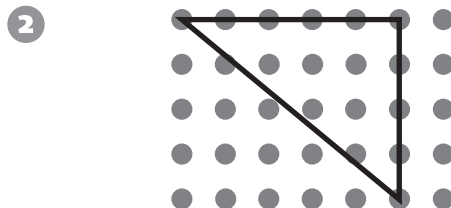


### Geometry


Find the area of the figure. The smallest square on the grid has an area of 1 square unit.



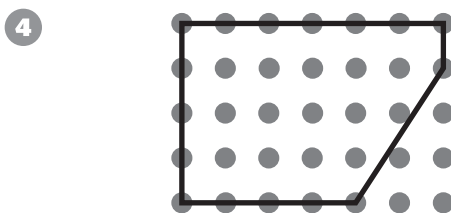
Area =  square units



Area =  square units



Area =  square units



Area =  square units

### Measurement

Write the equivalent measure.

5 16 ounces =  pound

6 2 pounds =  ounces

7 2,000 pounds =  ton

8 5 tons =  pounds

9 80 ounces =  pounds

10 500 pounds =  ton

11  $\frac{3}{4}$  pound =  ounces

12 40 ounces =  pounds

13  $3\frac{1}{2}$  pounds =  ounces

14  $\frac{1}{10}$  ton =  pounds

© Education Development Center, Inc.