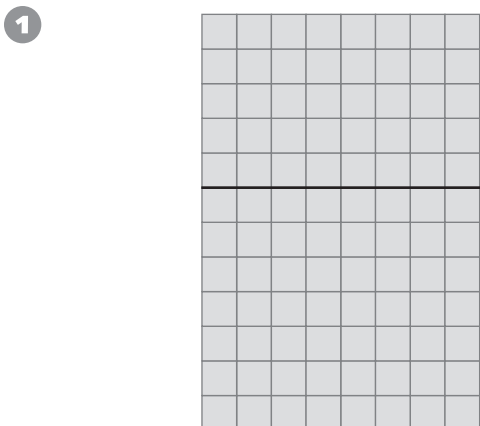


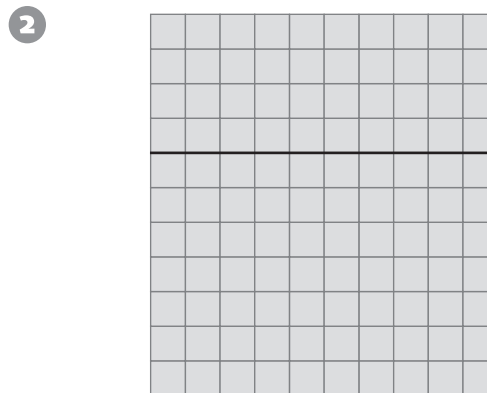
## Number and Operations

Complete the multiplication sentences for the picture.



$$(5 \times \square) + (7 \times \square) =$$

$$12 \times \square = \square$$



$$(4 \times \square) + (\square \times \square) =$$

$$\square \times \square = \square$$

## Data Analysis and Probability

For 3–6, use the spinners. List all possible outcomes for the experiment.

3 You spin Spinner A once.

\_\_\_\_\_

\_\_\_\_\_

4 You spin Spinner B once.

\_\_\_\_\_

\_\_\_\_\_

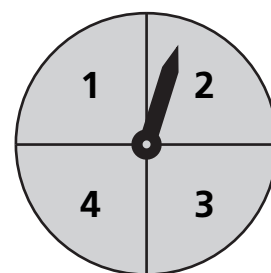
5 You spin Spinner A once. Then you spin it again and add the two results.

\_\_\_\_\_


\_\_\_\_\_

6 You spin both spinners. Then you subtract the smaller number from the greater number.

\_\_\_\_\_



**Spinner A**



**Spinner B**