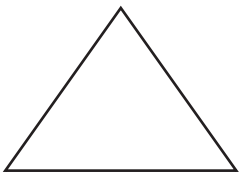


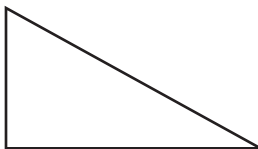
Geometry

Write whether the triangle is *acute*, *obtuse*, or *right*.

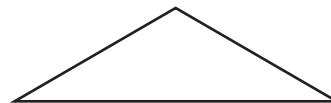
1



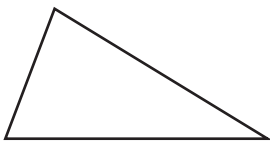
2



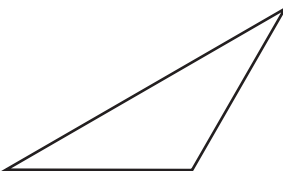
3



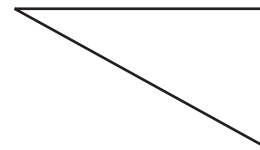
4



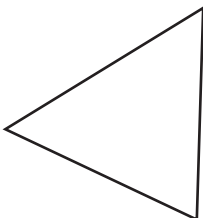
5



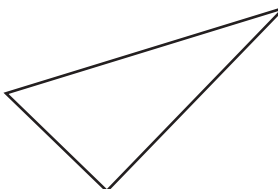
6



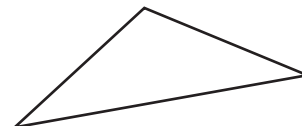
7



8



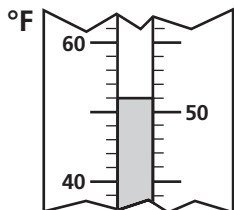
9



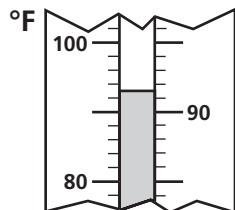
Measurement

The thermometer shows the high temperature for a day. Suppose the low temperature for the day was 15° colder. Write the low temperature.

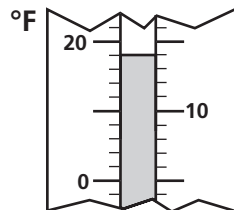
10



11



12



13

