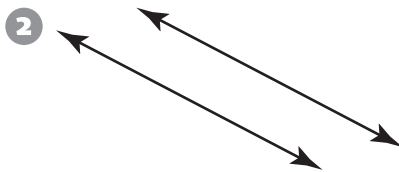
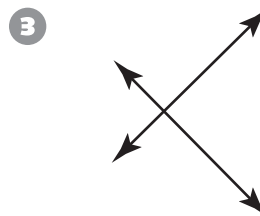



Geometry

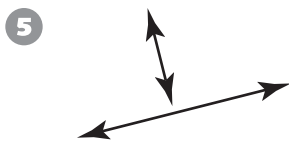
Write *perpendicular*, *parallel*, or *neither* to describe the pair of lines.

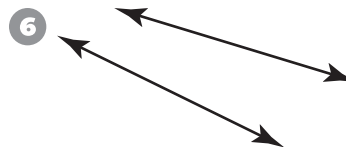












Measurement

Find the sum or difference.

7
$$\begin{array}{r} \$0.93 \\ +\$0.87 \\ \hline \end{array}$$

8
$$\begin{array}{r} \$2.07 \\ -\$1.28 \\ \hline \end{array}$$

9
$$\begin{array}{r} \$0.11 \\ +\$0.75 \\ \hline \end{array}$$

10
$$\begin{array}{r} \$1.00 \\ -\$0.66 \\ \hline \end{array}$$

11
$$\begin{array}{r} \$0.89 \\ +\$0.45 \\ \hline \end{array}$$

12
$$\begin{array}{r} \$1.00 \\ -\$0.10 \\ \hline \end{array}$$

13
$$\begin{array}{r} \$0.33 \\ +\$0.55 \\ \hline \end{array}$$

14
$$\begin{array}{r} \$0.98 \\ -\$0.69 \\ \hline \end{array}$$

15
$$\begin{array}{r} \$2.00 \\ -\$1.76 \\ \hline \end{array}$$

16
$$\begin{array}{r} \$10.00 \\ -\$1.76 \\ \hline \end{array}$$

17
$$\begin{array}{r} \$10.00 \\ -\$3.76 \\ \hline \end{array}$$