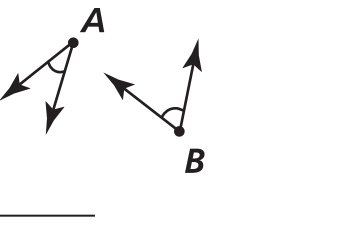
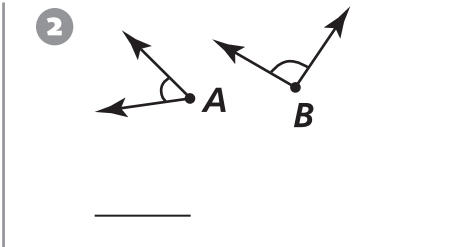
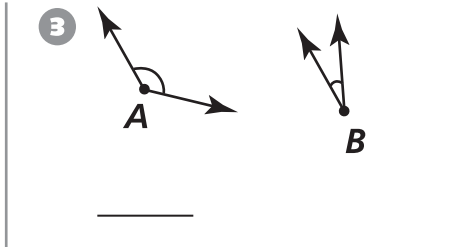


Geometry

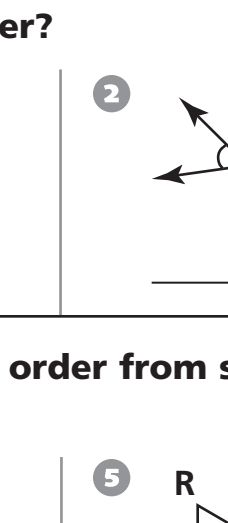
Which angle is larger?

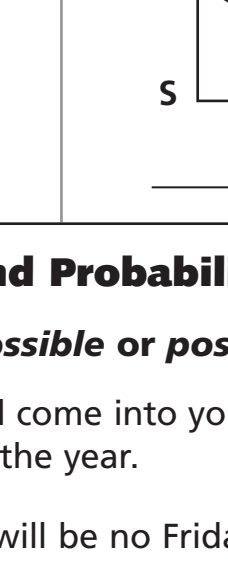
1 

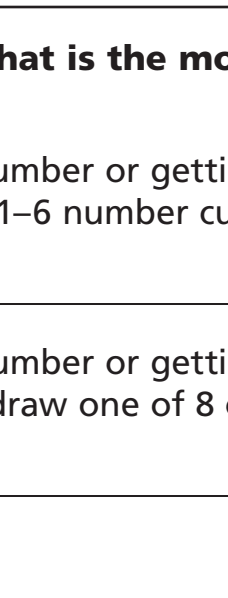
2 

3 

Write the angles in order from smallest to largest.

4 

5 

6 

Data Analysis and Probability

For 7–8, write *impossible* or *possible*.

- 7 A new student will come into your class before the end of the year. _____
- 8 Next week, there will be no Friday. _____

Choose the event that is the more likely of the two.

- 9 getting an even number or getting a number less than 3 when you roll a 1–6 number cube

- 10 getting an even number or getting a number greater than 3 when you draw one of 8 cards marked 1–8
