

Number and Operations

Find the sum.

1
$$\begin{array}{r} 1.4 \\ +6.3 \\ \hline \end{array}$$

2
$$\begin{array}{r} 2.12 \\ +1.27 \\ \hline \end{array}$$

3
$$\begin{array}{r} 0.35 \\ +0.91 \\ \hline \end{array}$$

4
$$\begin{array}{r} 1.29 \\ +0.4 \\ \hline \end{array}$$

5
$$\begin{array}{r} 0.92 \\ +0.18 \\ \hline \end{array}$$

6
$$\begin{array}{r} 0.58 \\ +0.07 \\ \hline \end{array}$$

7
$$\begin{array}{r} 0.58 \\ +0.7 \\ \hline \end{array}$$

8
$$\begin{array}{r} 0.6 \\ +0.9 \\ \hline \end{array}$$

9
$$\begin{array}{r} 9.7 \\ +0.7 \\ \hline \end{array}$$

10
$$\begin{array}{r} 4.92 \\ +5.08 \\ \hline \end{array}$$


11 $3.41 + 7.5$

12 $3.41 + 7.6$


13 $3.41 + 7.7$

Measurement

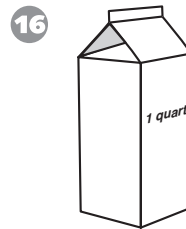
Write the equivalent measure.



_____ cups




_____ pints




_____ cups



_____ pints



_____ quarts



_____ cups