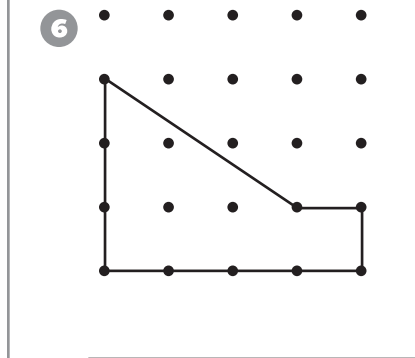
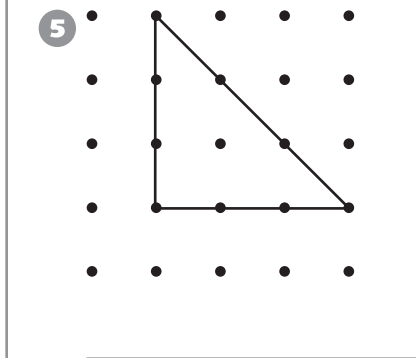
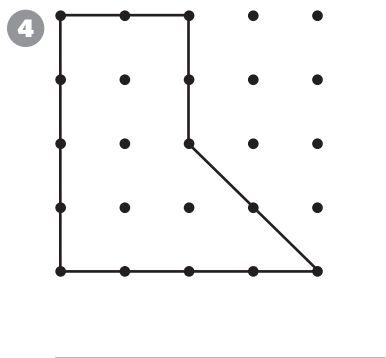
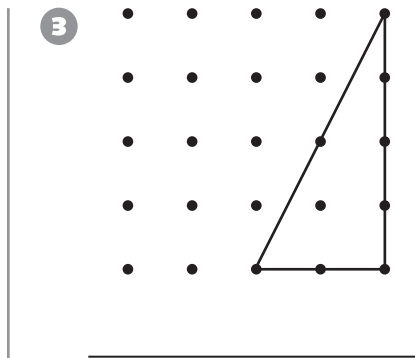
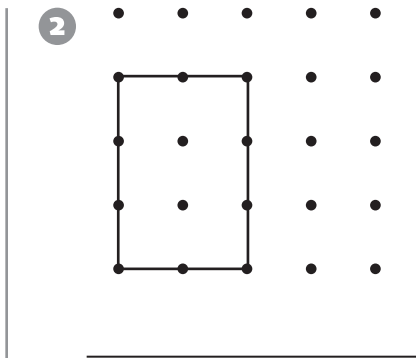
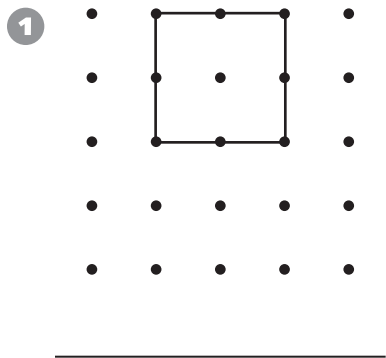


Geometry

Find the area of the figure. The area of the smallest square on the dot grid is 1 square unit.



Algebra

Complete the last two rows of the table. Then write a rule for the table.

7

Week	Saved
1	\$1.00
2	\$3.00
3	\$5.00
4	\$7.00
5	
6	

8

Books	Pens
3	6
4	8
5	10
6	12
7	
8	

9

Wheels	Tricycles
27	9
24	8
21	7
18	6
15	
12	
