

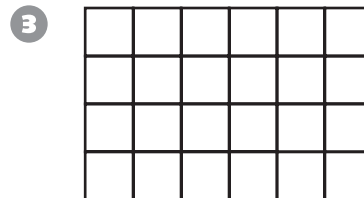


Number and Operations


Write a multiplication sentence for the array.














Problem Solving

Solve the problem. Explain your answer.

- 7 A school tennis tournament has 8 players. Each player plays until he or she loses one game and is eliminated. How many games will be needed to find the tournament winner?

- 8 Ramon's locker combination is a two-digit number. He can't remember the first digit, but he knows it is either 3, 5, 7, or 9. How many different combinations could he try if the lock shows numbers from 0 to 9?

