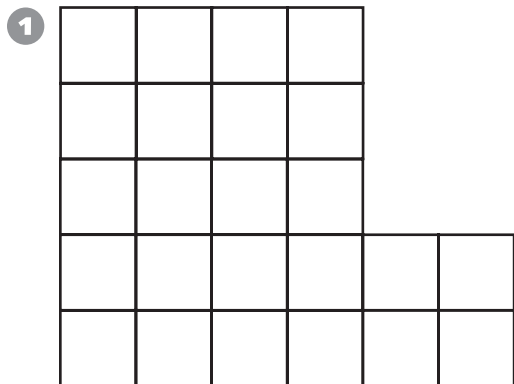
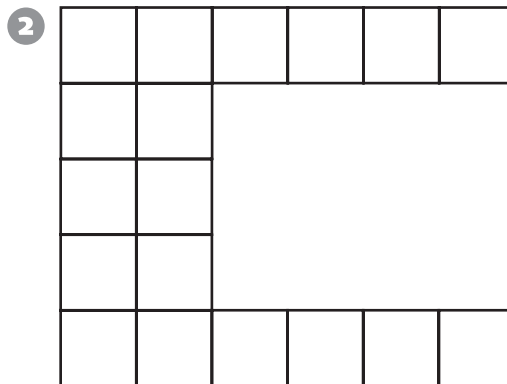


Geometry

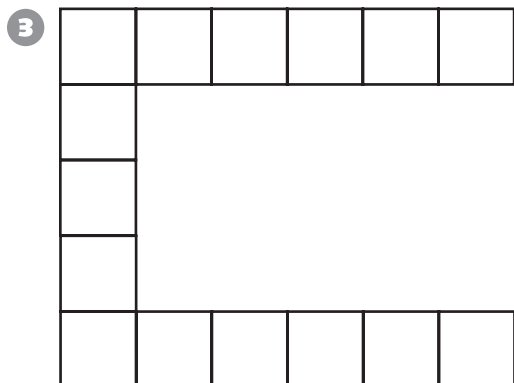
Find the area of the figure. The area of the smallest square is 1 square centimeter.




Area = _____ cm²



Area = _____ cm²



Area = _____ cm²



Area = _____ cm²

Data Analysis and Probability

You toss a 1–6 number cube. Write the more likely event. If the events are equally likely, write *equally likely*.

- 5 tossing an even number or an odd number _____
- 6 tossing an even number or a number less than 3 _____
- 7 tossing a factor of 4 or a factor of 6 _____
- 8 tossing a multiple of 2 or a multiple of 3 _____

© Education Development Center, Inc.