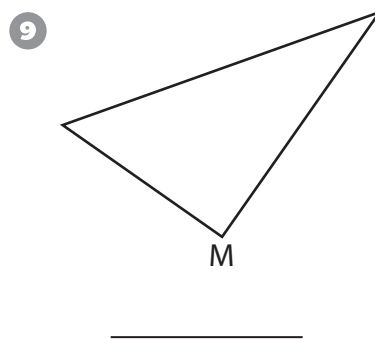
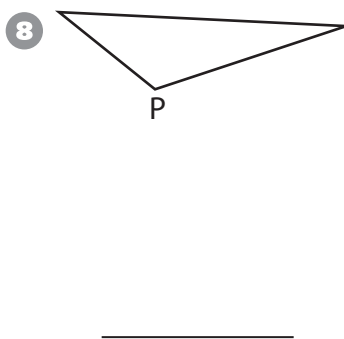
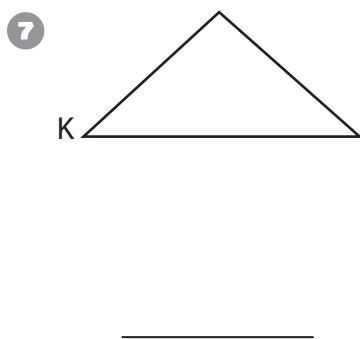
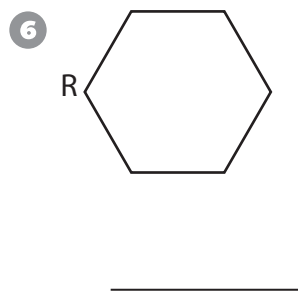
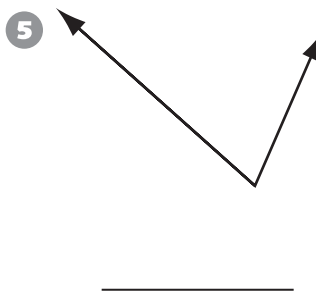
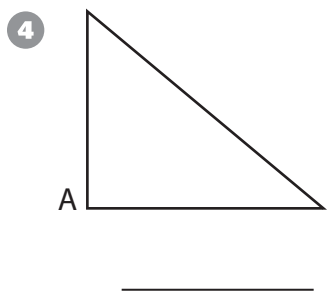
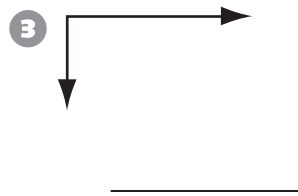
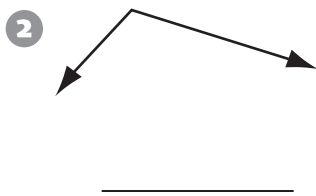
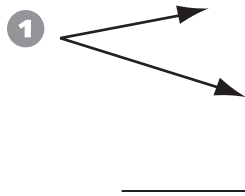


Geometry

Write *acute*, *right*, or *obtuse* to describe the angle.



Problem Solving

Solve the problem. Explain your answer.

- 10 Jake has a fair spinner numbered 1–8. He spins it 24 times to see how many numbers come up exactly $\frac{1}{8}$ of the time. Here are his results.

3, 4, 4, 5, 6, 8, 7, 1, 8, 7, 3, 2, 5, 5, 4, 6, 7, 1, 2, 3, 8, 2, 5, 7

Which numbers came up more times than expected?
