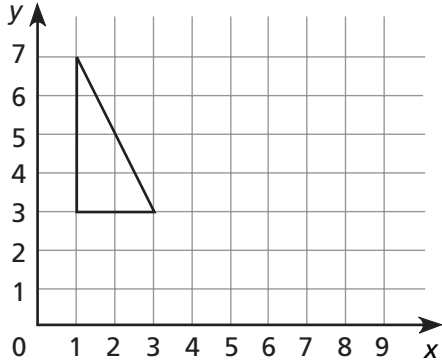


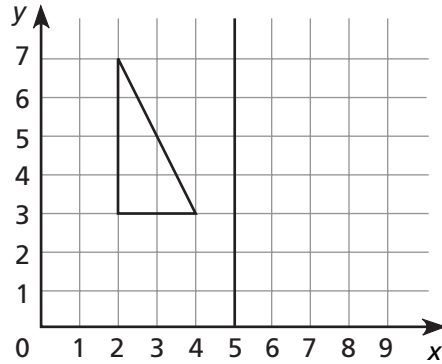
Geometry

Draw the result of the transformation.

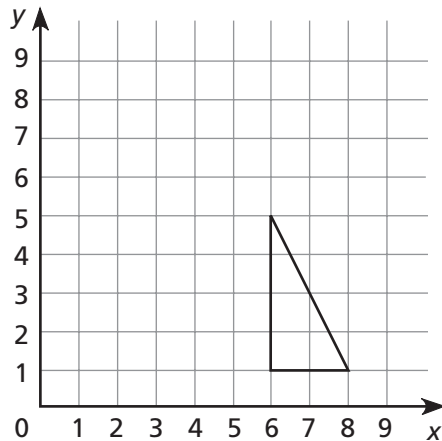
- 1 Translate the triangle 5 units right and 3 units down.



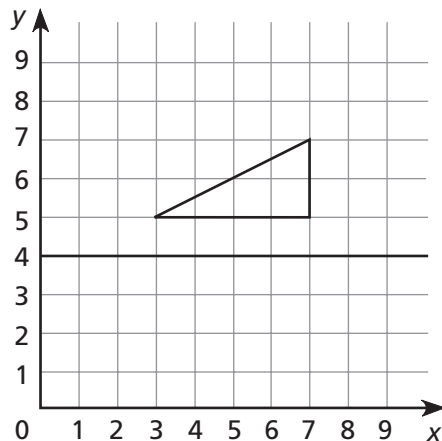
- 2 Reflect the triangle across the line.



- 3 Translate the triangle 3 units left and 4 units up.



- 4 Reflect the triangle across the line.



Problem Solving

Solve the problem. Explain your answer.

- 5 How many different money amounts can you make with a penny, a nickel, a dime, and a quarter?
