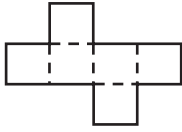


**Geometry**

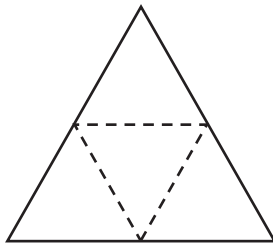
**Describe the figure that can be made from the net.**

1



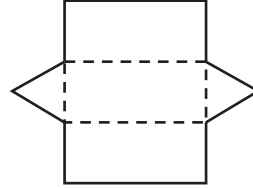
\_\_\_\_\_

2



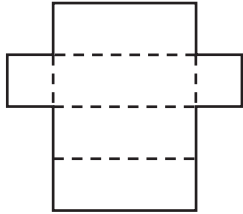
\_\_\_\_\_

3



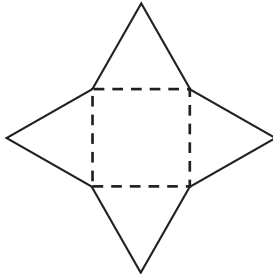
\_\_\_\_\_

4



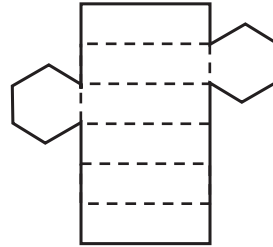
\_\_\_\_\_

5



\_\_\_\_\_

6



\_\_\_\_\_

**Measurement**

**Use a ruler to measure an object that matches the description. Write the name of the object that you measure and its length.**

7 something about as long as your notebook \_\_\_\_\_

8 something about as long as your thumb \_\_\_\_\_

9 something about 2 feet long \_\_\_\_\_

10 something about 9 inches long \_\_\_\_\_

11 something about as tall as your teacher \_\_\_\_\_