


# Finding Products of Large Factors


Draw lines to show how you would split the area model and write in the partial products. Record the total.

1



$$\begin{array}{r} 42 \\ \times 67 \\ \hline \end{array}$$

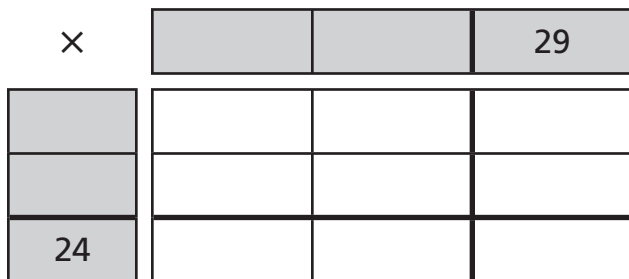
2



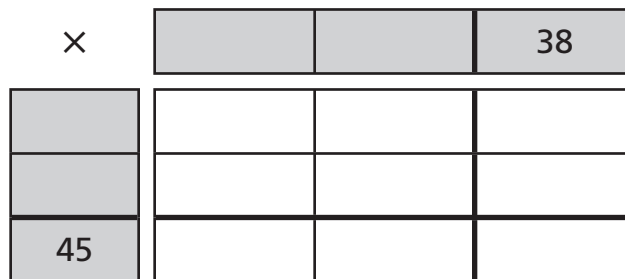
$$\begin{array}{r} 33 \\ \times 46 \\ \hline \end{array}$$

Complete the puzzles and diagrams.

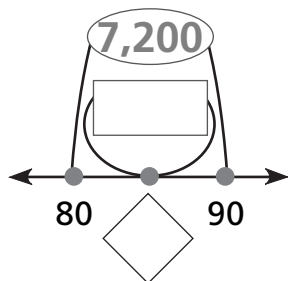
3



4



5



6

