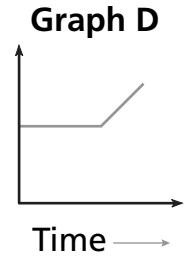
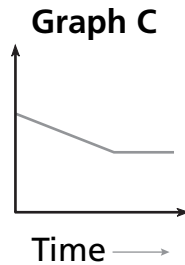
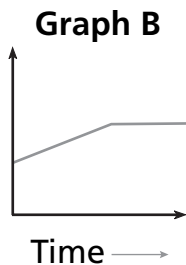
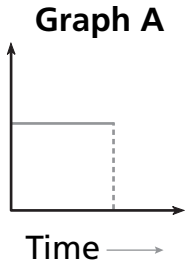


Graphing the Story of a Candle



A candle burned for a while and then was blown out. Which of the graphs above could show . . .

1 How the height of the candle changed over time. _____

2 How the amount of light the candle gives off changed over time. _____

3 The amount of melted wax at the bottom of the candle. _____

4 Explain why you chose one of your answers.

