

# Investigating Decimals

Write any number that comes between the two given numbers.

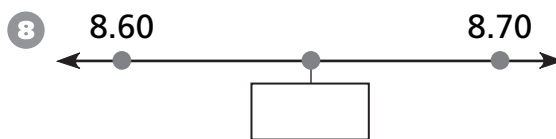
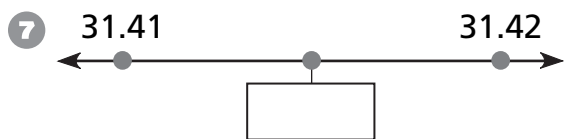
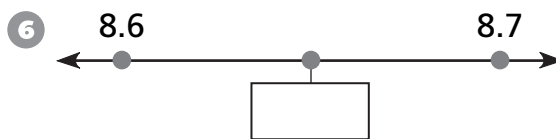
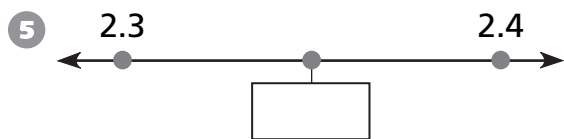
1 10 \_\_\_\_\_ 11

2 8.7 \_\_\_\_\_ 8.8

3 0.5 \_\_\_\_\_ 0.6

4 9.18 \_\_\_\_\_ 9.19

Write the number that comes halfway between the two given numbers.



## Test Prep

9 Which number could **not** be a common denominator for fractions with denominators of 6 and 8?

- A. 24
- B. 12
- C. 96
- D. 48

10 The table shows the prices for tickets to a museum. How much will it cost for a class of 23 students?

Tickets	3	7	11	15
Prices	\$8.25	\$19.25	\$30.25	\$41.25

- A. \$57.25
- B. \$62.25
- C. \$63.25
- D. \$68.50