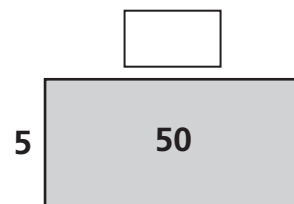
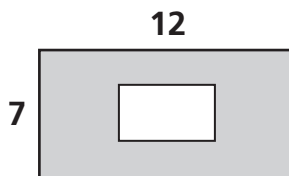
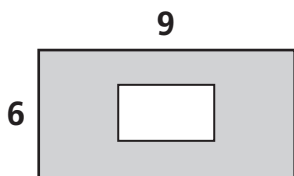


# Connecting Multiplication and Division

1 Each of these rectangles should be labeled with its area (inside) and the lengths of its sides. Fill in the missing values.



2 Fill in the missing numbers.

×	7
9	

×	7
6	42

$$9 \overline{) 81}$$

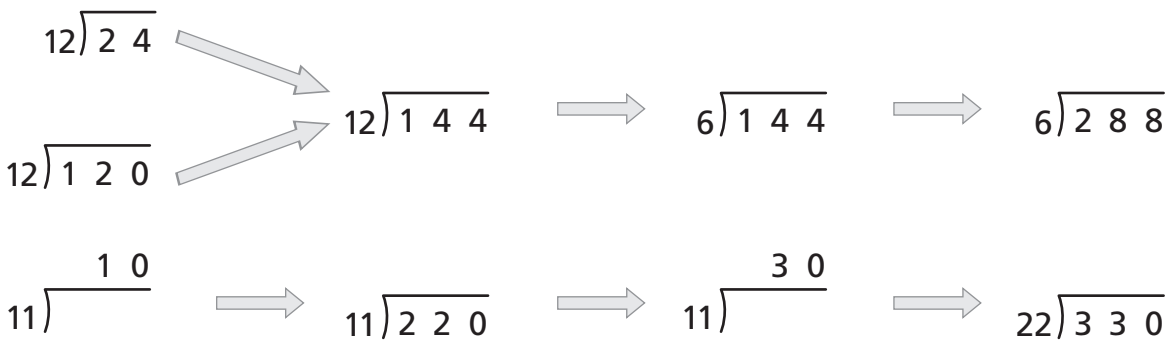
$$11 \overline{) 110}$$

$$12 \overline{) \quad 12}$$

$$10 \overline{) 140}$$

$$13 \overline{) 260}$$

3 Use each problem to help you with related problems.



## Test Prep

4 Fifteen minutes after the time shown on the clock, Marcie began dinner. She finished dinner at 6:10 P.M. How long did she spend eating dinner?

- A. 25 minutes
- B. 30 minutes

- C. 35 minutes
- D. 40 minutes

