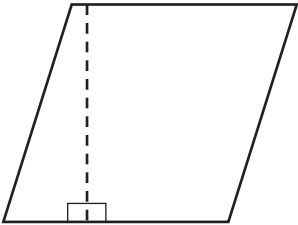


Area of Parallelograms

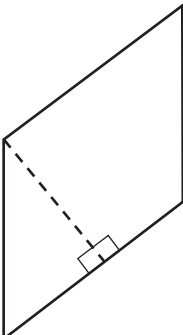
Find the area of each parallelogram.
Record the area in square centimeters (sq cm).

1



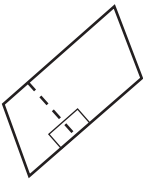
Base 3 cm
Height 3 cm
Area _____

2



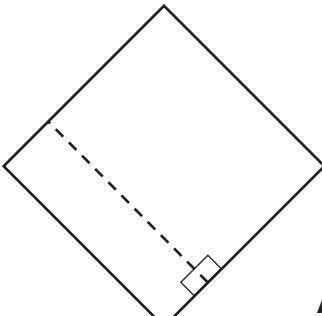
Base 3 cm
Height 2 cm
Area _____

3



Base 2 cm
Height 1 cm
Area _____

4



Base 3 cm
Height 3 cm
Area _____

Solve the problem.

- 5** A rectangular field measures 12 feet by 8 feet. A farmer needs to know the area in order to buy seed. What is the area? _____



Test Prep

- 6** The area of the large shaded rectangle is 1. What fraction can you write for the area of the shaded triangle? Explain.

