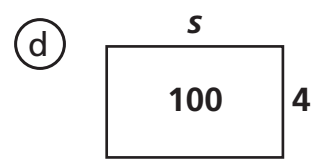
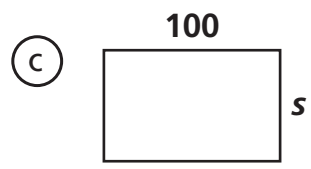
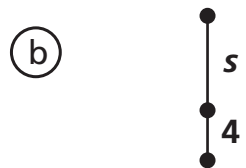
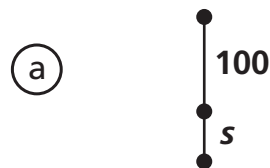


Making Diagrams

Match the situation to the diagram that illustrates it.

- 1 Steven has stilts that make him seem 4 feet taller than he really is!
- 2 Boxes of Lovitt’s Lemon Cookies have four rows of cookies in them. There are 100 cookies in a box.
- 3 A football field is 100 yards long and many yards wide.
- 4 Pavarti walked 100 yards along a straight road, stopped to pet a cat, then walked a little further.



- 5 Draw a diagram that illustrates this situation.

Karl likes to bowl. He remembers that a lane is 42 inches wide, but he forgets how long the lane is.



Test Prep

- 6 Edmund is 5 years older than Felicia and 6 years older than Gil. If E represents Edmund’s age, F represents Felicia’s age, and G represents Gil’s age, which equation is NOT true?

A. $E = G + 6$

C. $G = E - 6$

B. $F = G + 1$

D. $F = E + 5$