



# Equations for Stories



**Jackie went to the pet store to look at the iguanas and birds.**



1 She noticed the animals had 24 feet all together. Complete the table to show the possible combinations of birds and iguanas.

<b>Birds</b>	0						
<b>Iguanas</b>							

2 If there are also 18 eyes, how many of each animal was there? \_\_\_\_\_

**On another day, there were  $B$  birds and  $I$  iguanas.**

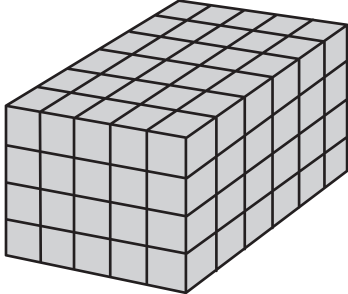
3 Write an equation that gives the number of eyes,  $E$ , for the birds and iguanas. \_\_\_\_\_

4 Write an equation that gives the number of feet,  $F$ . \_\_\_\_\_



## Test Prep

5 This rectangular prism is made of 1 cm cubes. What is its volume? Explain how you found the volume.



\_\_\_\_\_

\_\_\_\_\_

\_\_\_\_\_

\_\_\_\_\_