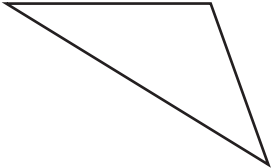
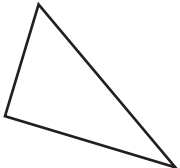
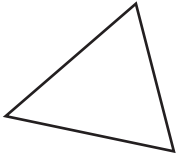
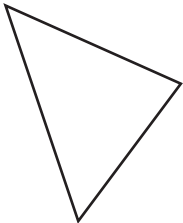
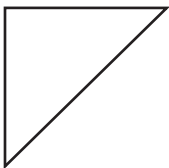
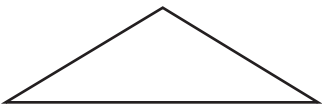


Geometry

Write *acute*, *right*, or *obtuse* to describe the appearance of each triangle.

<p>1</p>  <p>_____ triangle</p>	<p>2</p>  <p>_____ triangle</p>	<p>3</p>  <p>_____ triangle</p>
<p>4</p>  <p>_____ triangle</p>	<p>5</p>  <p>_____ triangle</p>	<p>6</p>  <p>_____ triangle</p>

Problem Solving

Use a strategy and solve.

- 7** A tennis tournament has 16 players. A player is eliminated as soon as he or she loses a match. How many matches will be needed to declare a winner? Explain.

- 8** What is the sum of the first 25 odd whole numbers? Use the table below to help you find a pattern.

Expression	1	1 + 3	1 + 3 + 5	1 + 3 + 5 + 7	1 + 3 + 5 + 7 + 9
Sum	1	4	9	16	25
