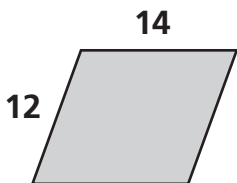


Geometry

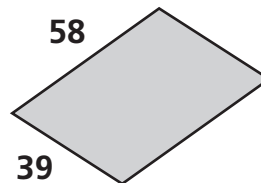
Find the perimeter of the parallelogram.

1



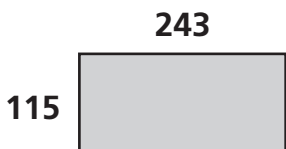
Perimeter: _____ units

2



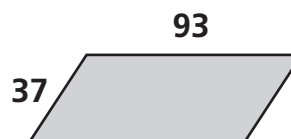
Perimeter: _____ units

3



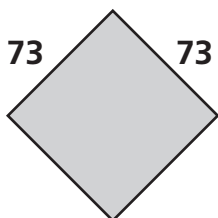
Perimeter: _____ units

4



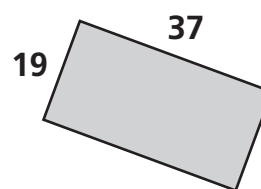
Perimeter: _____ units

5



Perimeter: _____ units

6



Perimeter: _____ units

Problem Solving

Use a strategy and solve.

7 A class bulletin board is a rectangle 8 feet long by 4 feet wide. The students have made posters that are 2 feet long by 1 foot wide. If no space is left between the posters, what is the greatest number of posters that can fit on the bulletin board?

8 Angela has 32 math homework problems. She does $\frac{1}{4}$ of them during her lunch period and $\frac{1}{4}$ of what is left on the bus ride home from school. How many problems does she have left to do at home?
