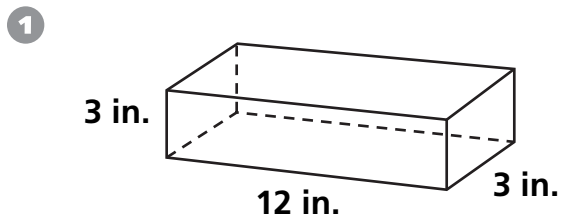


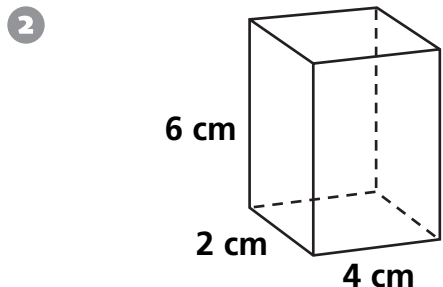
Measurement

Find the area of the base and the volume of the rectangular prism.



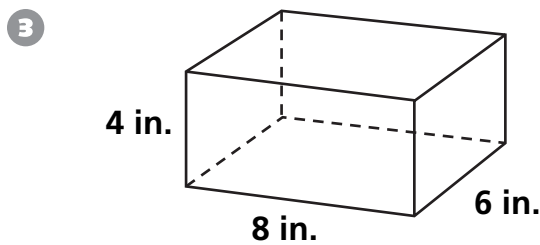
Area of base: _____

Volume: _____



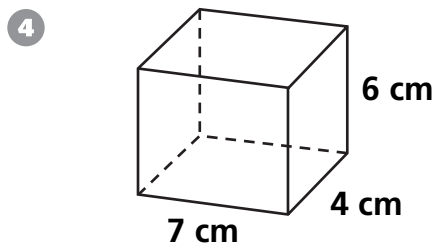
Area of base: _____

Volume: _____



Area of base: _____

Volume: _____



Area of base: _____

Volume: _____

Data Analysis and Probability

Make a list of all possible outcomes for each experiment.

⑤ Toss two number 1–6 number cubes. Add the numbers.

⑥ Toss two 1–6 number cubes. Subtract the smaller number from the larger number. If both cubes show the same number, subtract either one from the other.

⑦ Toss two 1–6 number cubes. Divide the larger number by the smaller number. If the quotient is not a whole number, toss them again.
