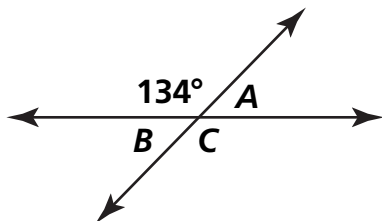


Geometry

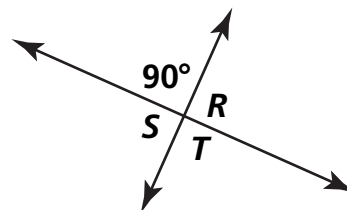
Figure out the missing angle measures, and complete the table. No protractors, please!

1



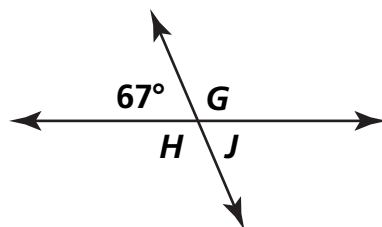
Angle	Measure
$\angle A$	
$\angle B$	
$\angle C$	

2



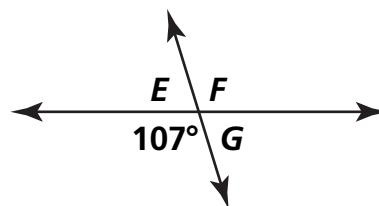
Angle	Measure
$\angle R$	
$\angle S$	
$\angle T$	

3



Angle	Measure
$\angle G$	
$\angle H$	
$\angle J$	

4



Angle	Measure
$\angle E$	
$\angle F$	
$\angle G$	

Problem Solving

For 5–6, use the survey data. Use a strategy and solve.

Ms. Sawyer took a survey of her students to find out how many pets they had. These are the results.

1, 1, 2, 1, 0, 0, 0, 1, 2, 3, 2, 2,
1, 1, 1, 1, 3, 2, 2, 1, 0, 3, 2, 1

5 Complete the table.

Number of Pets				
Number of Students				

6 What is the median number of pets? _____