

Practice with Angles

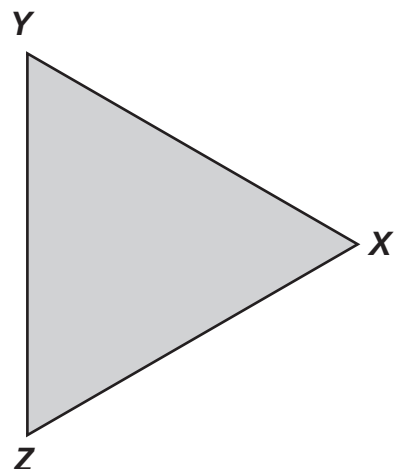
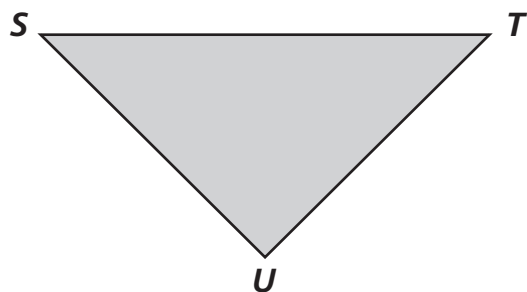
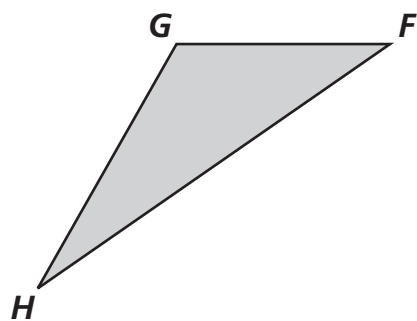
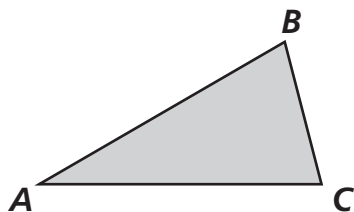


Table A	
1 $\angle A$ is	Acute Right Obtuse
2 $\angle G$ is	Acute Right Obtuse
3 $\angle U$ is	Acute Right Obtuse
4 $\angle X$ is	Acute Right Obtuse

Table B	
Angle	Measure
5 $\angle A$	
6 $\angle G$	
7 $\angle U$	
8 $\angle X$	