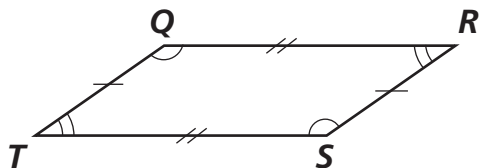


# Classifying Quadrilaterals

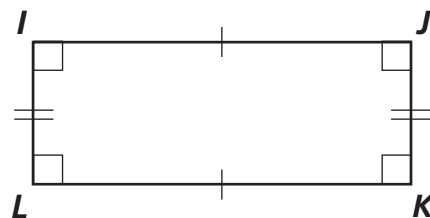
1



$$\overline{QR} \parallel \overline{ST}$$

$$\overline{QT} \parallel \overline{RS}$$

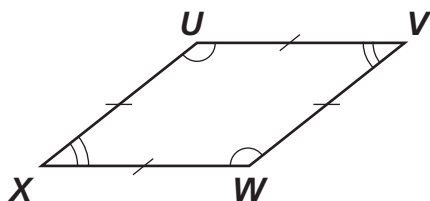
2



$$\overline{IJ} \parallel \overline{KL}$$

$$\overline{IL} \parallel \overline{JK}$$

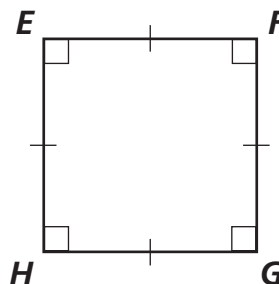
3



$$\overline{UV} \parallel \overline{XW}$$

$$\overline{UX} \parallel \overline{WV}$$

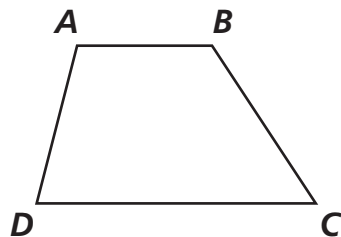
4



$$\overline{EF} \parallel \overline{GH}$$

$$\overline{EH} \parallel \overline{FG}$$

5



$$\overline{AB} \parallel \overline{DC}$$

6

