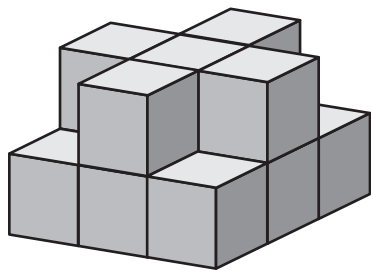
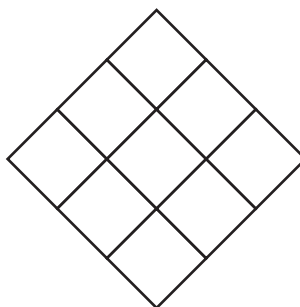


# Structures and Layers


Here are two structures made of inch cubes and diagrams of their bottom and top layers.



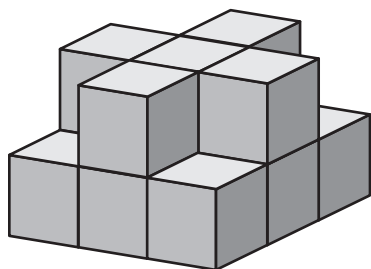
Structure A



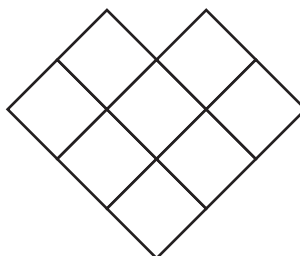
Bottom Layer




Top Layer



Structure B



Bottom Layer



Top Layer

**What do the diagrams of the top and bottom layers tell you about these structures?**

---



---



---



---