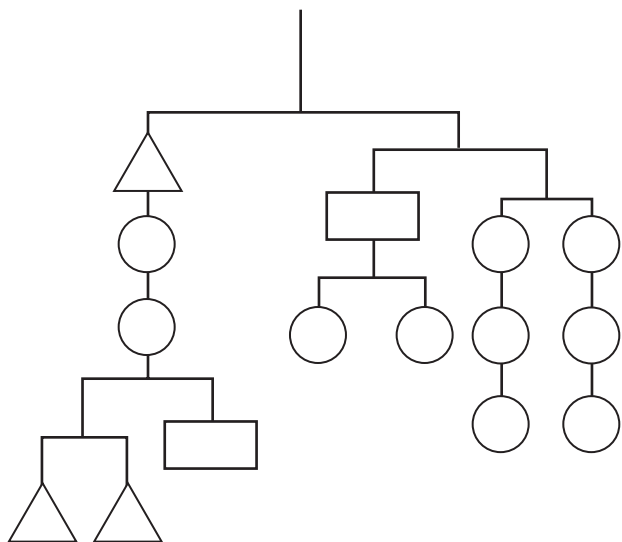


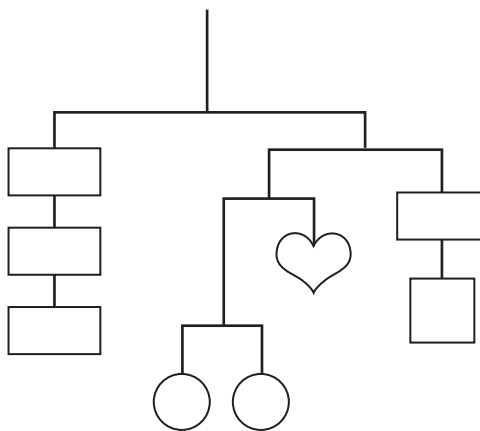
Mobiles and Equations






Write three equations that agree with each mobile.

A Total Weight: 48



B Total Weight: 48





	weight = t		weight = r		weight = s
	weight = c		weight = h		


A

_____ = _____

_____ = _____

_____ = _____

 = _____  = _____

 = _____

B

_____ = _____

_____ = _____

_____ = _____

 = _____  = _____

 = _____  = _____